
2012

Part: I

Question: 1 ii-v

Part: II

Section: A

Question: 2 – 4 v-viii

Section: B

Question: 5 – 7 viii-xi

Section: C

Question: 8 – 10 xi-xvi

Part I (Answer all questions)

Question: 1

a. Fill in the blanks by choosing the appropriate word/words from those given in the brackets:

(Raoult's, Arrhenus, lateral, sodium, magnesium, negative, positive, non-ideal, ideal, iron, copper, van't Hoff, s.p, ethanol, ethanoic acid, methanoic acid, methanol, propanoic acid.) [5]

i. For a spontaneous change to take place, the ΔS of the system should be _____ and ΔG of the system should be _____.

Answer:

ii. Hydrolysis of methyl propanoate gives _____ and _____.

Answer:

iii. Solutions which strictly obey _____ law are called _____ solutions..

Answer:

iv. π bonds are formed by the _____ overlap of _____ orbitals.

Answer:

v. Zinc can displace _____ from CuSO_4 solutions, but cannot displace _____ from MgSO_4 solution.

Answer:

b. Complete the following statements by selecting the **correct alternative** from the choices given: [5]

1. The quantity of electricity required to deposit 1-15g of sodium from molten NaCl ($\text{Na} = 23$, $\text{Cl} = 35.5$) is:

- 1 F
- 0.5 F
- 0.05 F
- 1.5 F

2. When acetic acid is reacted with calcium hydroxide and the product is distilled dry, the compound formed is:

- Calcium acetate
- Acetone
- Acetaldehyde
- Acetic anhydride



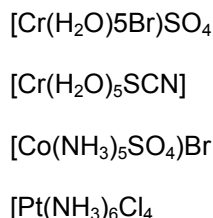
3. The $[\text{OH}]$ concentration of a weak base is given by:

$$\frac{ck_b}{\sqrt{ck_b}}$$
$$\sqrt{K_{b/c}}$$
$$\sqrt{Kb}$$

4. In a plot of $\log k$ vs $1/T$, the slope is:

$-E_a/2.303$
 $E_a/2.303 R$
 $E_a 2.303$
 $-4 E_a/2.303 R$

5. Among the following coordination compounds, the one giving a white precipitate with BaCl_2 solution is:



c. Answer the following questions:

[5]

- i. A solution X is prepared by dissolving three moles of glucose in one litre of water and a solution Y is prepared by dissolving 1.5 moles of sodium chloride in one litre of water. Will the osmotic pressure of X be higher, lower or equal to that of Y? Give a reason for your answer.

Answer:

Osmotic pressure of the two solutions X and Y will be same. Because osmotic pressure is a colligative property which depends on the number of particles present in the solution. Glucose is non-electrolyte.

\therefore Value of i for Glucose = 1

Value of i for NaCl = 2

Now for Glucose, $\pi = i \times cRT$

$$= 1 \times 3 RT / 1000 = 3RT / 1000$$

For NaCl $\pi = i \times cRT$

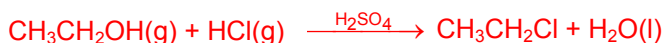
$$= 2 \times 1.5 RT / 1000 = 3RT / 1000$$

- ii. Give one example (equation) of a homogeneously catalyzed reaction and name the catalyst.

Answer:

Catalysts in solution with the reactants usually provide fast reaction paths by allowing reactants to form an unstable intermediate that quickly decomposes into products. For example, the substitution reaction





is catalyzed by acid because the ethanol is converted into unstable $\text{CH}_3\text{CH}_2\text{OH}_2^+$, which quickly reacts with Cl^- to produce the products.

- iii. Write the formula of the product formed when formaldehyde reacts with ammonia and name the product.

Answer:

Urotropine (hexamethylene tetramine) is formed when formaldehyde reacts with ammonia



- iv. If the ionization (dissociation) constant of acetic acid is K_a , what will be the pH of a solution containing equal concentrations of acetic acid and sodium acetate:

Answer:

We know that

$$\text{pH} = \text{p}K_a + \log \frac{[\text{Salt}]}{[\text{Acid}]}$$

$$\text{pH} = \text{p}K_a + \log \frac{[\text{CH}_3\text{COONa}]}{[\text{CH}_3\text{COOH}]}$$

[As given: concentration of salt and acid is same]

$$\text{pH} = \text{p}K_a + \log 1$$

$$\text{pH} = \text{p}K_a$$

- v. What is the electronic configuration of chromium atom ($Z=24$)? Give a reason for your answer.

Answer:

In the world of quantum numbers, different elements are shown as having different electron configurations. For chromium (Cr) one would predict it would have the configuration: ($Z=24$): $[\text{Ar}] 4s^2 3d^4$. However, in experiments, it shows an actual electron configuration of: Cr ($Z=24$): $[\text{Ar}] 4s^1 3d^5$.

- d. Match the following:

i. Nernst equation	a. Water
ii. Lactic acid	b. Constant volume
iii. Amphoteric solvent	c. Ammonia
iv. Lewis base	d. Optical isomers
v. Isochoric process	e. Electrochemical cells

Answer:

i. (e) ii (d) iii (a) iv (c) v (b)

Part II (Answer six questions choosing two from section A, two from section B. And two from section C)

Section A (Answer any two questions)



Question: 2

- a.
- i. A solution of urea in water has a boiling point of 100.18°C . Calculate the freezing point of the solution. (K_f for water is $1.86 \text{ K kg mol}^{-1}$ and K_b for water is $0.512 \text{ K kg mol}^{-1}$). [2]

Answer:

Calculation of molality of the solution:

$$100.18^{\circ}\text{C} + 273 = 373.18 \text{ K}$$

$$100^{\circ}\text{C} + 273 = 373 \text{ K}$$

$$\Delta T_b = 373.18 - 373 \text{ K}$$

$$= 0.18 \text{ K}$$

$$\Delta T_b = K_b \times m$$

$$m = \frac{\Delta T_b}{K_b} = \frac{0.18}{0.512}$$

$$= 0.351 \text{ m}$$

Calculation of freezing point:

$$\Delta T_f = K_f \times m$$

$$= 1.86 \times 0.351$$

$$= 0.652 \text{ K}$$

$$\Delta T_f = T_f - \Delta T_f$$

$$= 273 \text{ K} - 0.652 \text{ K}$$

$$= 272.348 \text{ K}$$

$$T_f = -0.652^{\circ}\text{C}.$$

- ii. A solution of lactose containing 8.45 g of lactose of 100g of water has a vapor pressure of 4.559 mm of Hg. Calculate the molecular weight of lactose. [2]

Answer:Vapour pressure of solvent (P^0) = 4.579 mmVapor pressure of solution (P) = 4.559 mmMass of solution (ω) = 8.45 gMass of solvent (W) = 100gMolecular mass of solvent H_2O (M) = 18Molecular mass of solute (M') = ?

According to Raoult's law

$$M' = \frac{8.45 \times 18 \times 4.579}{100 \times 0.02}$$

$$\frac{P^0 - P}{P^0} = \frac{\omega M}{W.M'}$$

$$\frac{4.579 - 4.559}{4.579} = \frac{8.45 \times 18}{100 \times M'}$$

$$M' = 348.232$$

Hence, Molecular Mass of lactose = 348.232

b.

- i. The molecular weight of H_2S is more than that of H_2O , but H_2S is a gas and H_2O is a liquid. Explain. [3]



Answer:

This is because of the intermolecular hydrogen bonding present in H_2O but not in H_2S due to the low electronegativities of sulphur as compare to oxygen.

- ii. When potassium cyanide reacts with water, will the resulting solution be acidic, alkaline or neutral? Justify your answer. [2]

Answer:



Resulting solution will be basic (weakly) due to the formation of strong base KOH and weak acid HCN.

- c. What is the hybridization of the carbon atom in ethyne molecule? What is the H-C-H bond angle? (**) [1]

Answer:

Question: 3

a.

- i. State the second law of thermodynamics in terms of the entropy of the universe. (**) [1]

Answer:

- ii. Calculate the maximum work that can be obtained from the given electrochemical cell constructed with two metals M and N. $[E^\circ \text{M}^{+2}/\text{M} = -0.76 \text{ V}, E^\circ \text{N}^{+2}/\text{N} = +0.34 \text{ V}]$. the cell reaction is $\text{M} + \text{N}^{+2} \rightarrow \text{M}^{+2} + \text{N}$ [3]

Answer:

$$\begin{aligned} E^\circ_{\text{cell}} &= E_R - E_L \\ &= 0.34 - (-0.76) \\ &= 1.10 \text{ V} \end{aligned}$$

$$\begin{aligned} \text{Max. work done} &= -nF E^\circ_{\text{cell}} \\ &= -2 \times 96500 \times 1.10 \\ &= -212300 \text{ J} \\ &= -212.3 \text{ kJ} \end{aligned}$$

b.

- i. To precipitate group III cations NH_4Cl should be added to the solution before the addition of ammonium hydroxide. Explain why. [2]

Answer:



NH_4^+ ion present in both, create common ion effect which depress the concentration of OH^- as a result ionic product will be increases as compare to solubility product and hence precipitate will formed.

- ii. A study of chemical kinetics of the reaction $\text{A} + \text{B} \rightarrow \text{products}$, gave the following data at 25°C : [2]



Experiment	[A]	[B]	D[Products]/dt
1	1.0	0.15	4.20×10^{-6}
2	2.0	0.15	8.40×10^{-6}
3	1.0	0.20	5.60×10^{-6}

Find :

- (1) The order of reaction with respect to A.
- (2) The order of reaction with respect to B.
- (3) The rate law.

Answer:

Suppose the given reaction is of order p with regards to A and q with regards to B. the rate of formation of product can thus be written as:

$$4.20 \times 10^{-6} = K[1.0]^p [0.15]^q \quad \dots(i)$$

$$8.40 \times 10^{-6} = K[2.0]^p [0.15]^q \quad \dots(ii)$$

$$5.60 \times 10^{-6} = K[1.0]^p [0.20]^q \quad \dots(iii)$$

Dividing equation (ii) by (i) we get

$$\frac{8.40 \times 10^{-6}}{4.20 \times 10^{-6}} = \left(\frac{2.0}{1.0}\right)^p$$

$$\frac{5.60 \times 10^{-6}}{4.20 \times 10^{-6}} = \left(\frac{0.20}{0.15}\right)^q$$

$$\frac{4}{3} = \left(\frac{4}{3}\right)^q$$

$$\therefore q = 1$$

Hence (i) The order of reaction with regards to A is 1.

(ii) The order of reaction with regards to B is 1.

(iii) The rate Law can be written as

$$\text{Rate} = K [A] [B]$$

Question: 4

a.

- i. The central atom of methane and water is in the same state of hybridization, but the shapes of the two molecules are different. Discuss. (**)

[2]

Answer:

- ii. The conductivity of 0.2 M KCl solution is $3 \times 10^{-2} \text{ ohm}^{-1} \text{ cm}^{-1}$. Calculate its molar conductance.

[2]

Answer:

Molar Conductivity =

$$\Lambda_m = \frac{k \times 1000}{M}$$

Given $k = 3 \times 10^{-2} \text{ ohm}^{-1} \text{ cm}^{-1}$, $M = 0.2 \text{ M}$

$$\begin{aligned} \Lambda_m &= \frac{3 \times 10^{-2} \times 1000}{0.2} \\ &= 1.5 \times 10^2 \text{ S cm}^2 \text{ mol}^{-1} \end{aligned}$$

b.



- i. Draw the valence shell molecular orbital diagram of oxygen molecule and predict its magnetic nature. (**) [2]
- ii. Calculate the solubility of lead chloride in water, if its solubility product is 1.7×10^{-5} . (Pb = 206, Cl = 35.5) [2]

Answer:

Given : $K_{sp}(\text{PbCl}_2) = 1.7 \times 10^{-5}$

$(\text{PbCl}_2) = [\text{Pb}^{2+}] [\text{Cl}]^2$

If solubility of PbCl_2 is S.

$$1.7 \times 10^{-5} = S \times (2S)^2$$
$$= S \times 4S^2 = 4S^3$$

$$S = \sqrt[3]{\frac{1.7 \times 10^{-5}}{4}} = 0.016$$

Molecular mass of $\text{PbCl}_2 = 207 + 2 \times 35.5 = 278$

Solubility, $S = 0.016 \times 278$

$S = 4.448 \text{ gL}^{-1}$.

- c. For a crystal of diamond, state: [2]

- i. The hybridization of the carbon atom.

Answer:

Hybridization of C-atom in diamond = sp^3

- ii. The coordination number of each carbon atom.

Answer:

Co-ordination of C-atom of each C-atom = 4

- iii. The type of lattice in which it crystallise.

Answer:

The type of lattice = fcc

- iv. The number of carbon atoms present per unit cell.

Answer:

The number of carbon atoms present per unit cell = 4

Section B (Answer any two questions)

Question: 5

- a. Write the formulae of the following coordination compounds: [2]
- i. Potassiumtetracyanonickel(0)

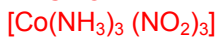
Answer:

$\text{K}_4[\text{Ni}(\text{CN})_4]$

- ii. Triamminetrinitrocobalt (III)



Answer:



b. $[\text{CoF}_6]^{3-}$ is a coordination complex ion.

[2]

i. What is the oxidation number of cobalt in the complex?

Answer:

Oxidation number of Cobalt = 3

ii. How many unpaired electrons are there in the complex?

Answer:

No. of unpaired electron = 4

iii. State the magnetic behavior of the complex.

Answer:

Highly paramagnetic.

iv. Give the I.U.P.A.C name of the complex.

Answer:

Hexafluoridocobalt (III) ion.

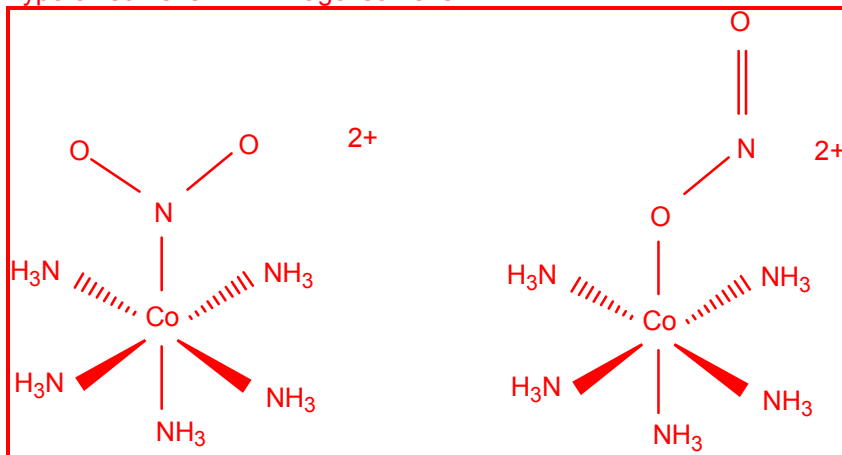
c. Draw the structural isomer of $[\text{Co}(\text{NH}_3)_5\text{NO}_2]\text{Cl}$ and name the type of isomerism.

[1]

Answer:

Structural isomer of $[\text{Co}(\text{NH}_3)_5\text{NO}_2]\text{Cl}_2 \leftrightarrow [\text{Co}(\text{NH}_3)_5\text{ONO}]\text{Cl}_2$

Type of isomerism = Linkage isomerism.



Question: 6

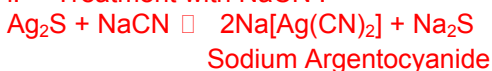
a. Give the equations for the conversion of argentite (Ag_2S) to metallic silver.

[2]

Answer:

Conversion of argentite (Ag_2S) to Ag:

i. Treatment with NaCN :



A current of hot air oxidizes Na_2S to Na_2SO_4



ii. Precipitation of Silver:



Sodium tetracyanozincate (II)

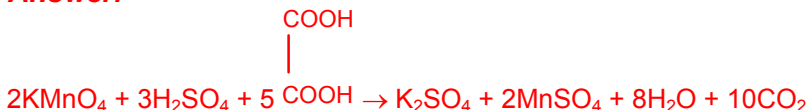
Silver thus obtained purified by electrolysis and deposited at cathode.

b. Give balanced equations for the following reactions:

[3]

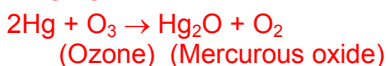
i. Acidified potassium permanganate and oxalic acid.

Answer:



ii. Ozone and mercury.

Answer:



iii. Action of heat on a mixture of sodium chloride and concentrated sulphuric acid.

Answer:



Question 7

a. Explain why transition metals form complex compounds.

[2]

Answer:

Transition metals form a large number of complex compounds due to the following reasons:

- Availability of vacant d-orbitals of suitable energy to accommodate lone pairs donated by ligands.
- Small size and High Nuclear charge.

b.

Answer:

i. What is the hybridization of the chlorine atom in ClF_3 molecule?

Answer:

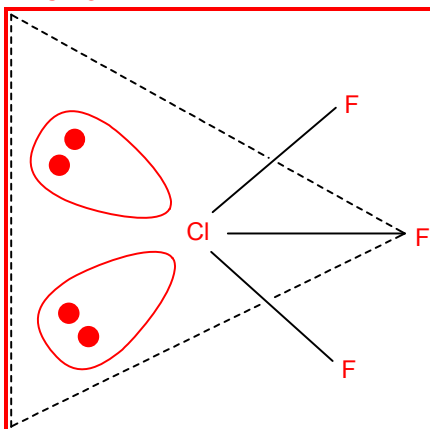
Sp^3d hybridization.

ii. Draw the structure of the molecule and state its geometry.

[2]



Answer:



T-shaped ClF_3

Geometry of ClF_3 is T-shaped and formed by sp^3d hybridization of the central atom X in its first excited state.

c. Name the inert gases used for:

[1]

i. Filling sodium vapor lamps.

Answer:

Argon (Ar)

ii. Obtaining light of different colours in neon signs.

Answer:

Neon (Ne)

Section C (Answer any two questions)

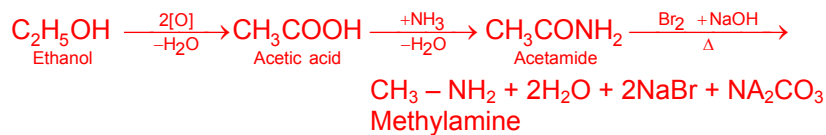
Question: 8

a. How can the following conversions be brought about:

i. Ethanol to methylamine.

[3]

Answer:

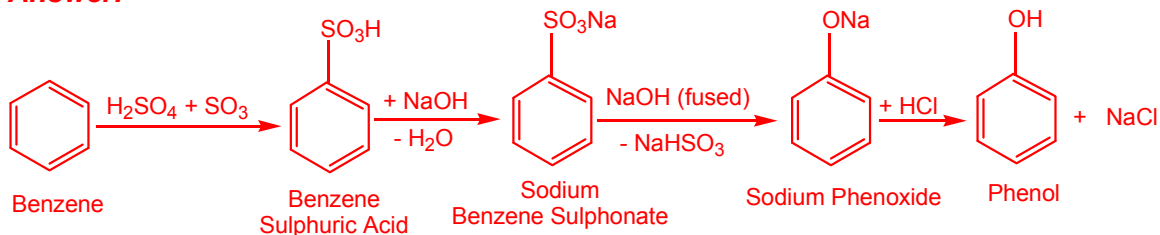


ii. Benzene to phenol

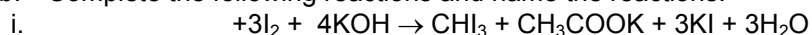
[2]



Answer:

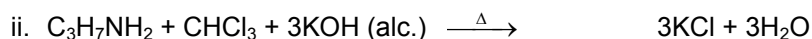
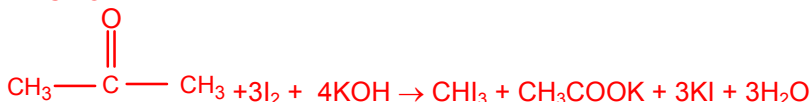


b. Complete the following reactions and name the reactions:



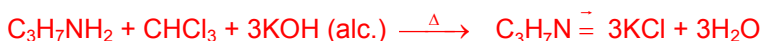
[3]

Answer:



[1]

Answer:



This is Carbylamine Reaction.

c. Name the type of polymerization (addition or condensation) and name the monomers in each of the following polymers: [2]

i. Protein

Answer:

Type of Polymerisation – Condensation
Monomers - α -Amino acids

ii. Polyethylene

Answer:

Type of Polymerisation – Addition
Monomers – Ethylene or Ethene

Question: 9

a.

i. What type of isomers are glucose and fructose?

[1]

Answer:

Glucose and Fructose are functional (Structural) isomers.

ii. Name the functional group common to both glucose and fructose.

Answer:

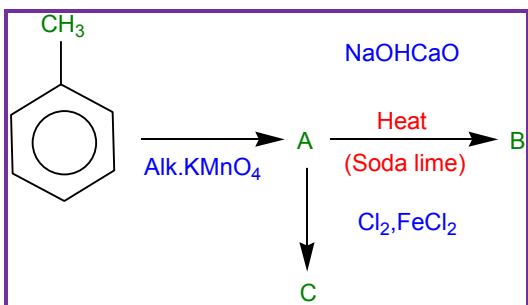
Hydroxyl Group – ($-\text{OH}$) common to both.

b.

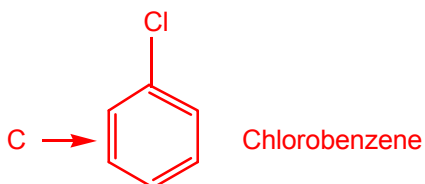
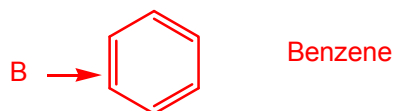
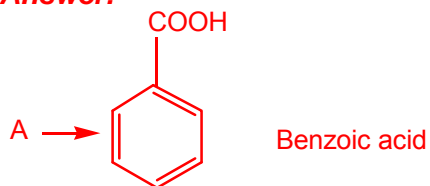
i. Identify the products A, B and C:

[3]

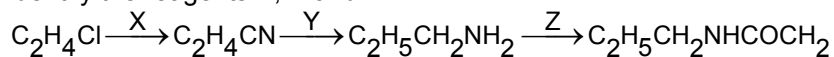




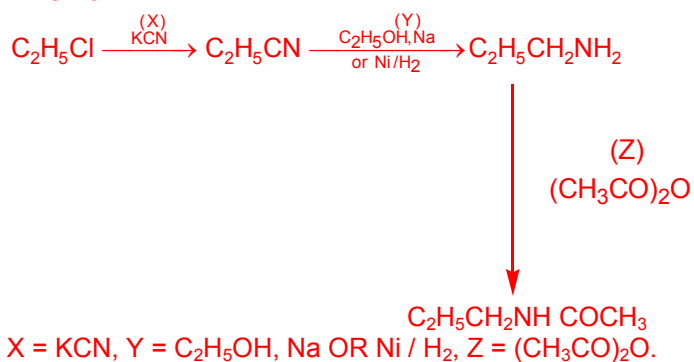
Answer:



ii. Identify the reagents X, Y and Z.



Answer:



c. Give balanced equations for the following reactions:

[3]

i. Benzaldehyde and Hydroxylamine.



Benzaldehyde + Hydroxyl Amine → Benzaldoxime + H₂O

O=C(O)c1ccccc1.ClP(Cl)(Cl)Cl>>O=C(Cl)c1ccccc1.ClOP(=O)(Cl)Cl.Cl

Benzoic Acid + Phosphorous Pentachloride → Benzoyl Chloride + POCl₃ + HCl

$$\begin{array}{ccccccc} \text{OH} & & & & & & \\ | & & & & & & \\ \text{CH}_2 - & \text{CH}_2 - & \text{CH}_2 - & \text{CH}_3 & + \text{HCl} & \xrightarrow{\text{ZnCl}_2} & \text{Cl} - \text{CH}_2 - \text{CH}_2 - \text{CH}_2 - \text{CH}_3 \\ \text{I-butanol} & & & & \text{Hydrogen Chloride} & & \text{Chloro Butane} \end{array}$$
$$\text{C}_6\text{H}_5\text{COOH} \xrightarrow{\Delta} \text{No Reaction}$$


Question: 10

- a. An aliphatic hydrocarbon A on treatment with sulphuric acid in the presence of HgSO_4 yields a liquid B with molecular formula $\text{C}_2\text{H}_4\text{O}$. B on oxidation with acidified potassium dichromate yields C which gives effervescence with sodium bicarbonate. C when treated with SOCl_2 gives D. when D reacts with ethanol it gives a sweet smelling liquid E. e is also formed when C reacts with ethanol in the presence of conc. H_2SO_4 .

i. Identify A,B,C,D and E.

[4]

Answer:

A \rightarrow C_2H_2
Ethyne

B \rightarrow CH_3CHO
Ethanal


C \rightarrow CH_3COOH
Ethanoic Acid

D \rightarrow CH_3COCl
Ethanoyl chloride

E \rightarrow $\text{CH}_3\text{COOC}_2\text{H}_5$
Ethyl Ethanoate

ii. Draw the structure of the isomer of compound B.

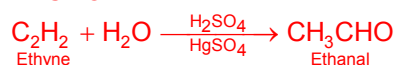
[1]



Answer:

iii. Write the balanced equation for the conversion of A to B.

Answer:



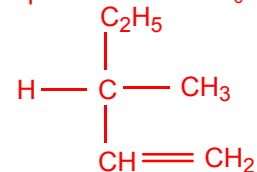
b. The compound C_5H_{12} shows optical isomerism. Draw the structural formula of the compound and name it.

[1]

i.

Answer:

Optical isomer of C_6H_{12}



3 - methyl- pent 1 - enl

ii. Name any three types of isomerisms that the compounds with molecular formula $\text{C}_4\text{H}_7\text{Cl}$ can give rise to. Also represent the structures of the compounds relevant to these isomers.

[3]



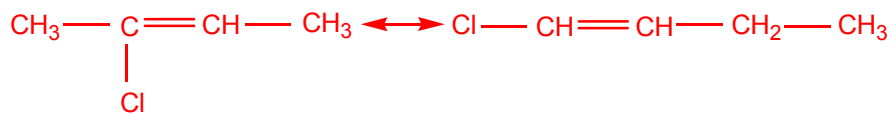
Answer:

Compound with molecular formula C_4H_7Cl is



(I)

(1 - Chloro but - 2 - ene)



(II)


(2 - Chlorobut - 2 - ene)

(III)

(1 - Chloro but -1 - ene)

- c. Give equations to show what happens when a mixture of potassium cyanate and ammonium sulphate is strongly heated. Name the reaction. [2]

Answer:



Potassium Ammonium pot. Ammonium
Cyanate sulphate sulphate Cyanate

Ammonium cyanate on rearrangement gives urea.



Amm. Cyanate Urea

This is wöhler's synthesis of urea.

(**) Currently out of syllabus. Answer can be provided up on request

